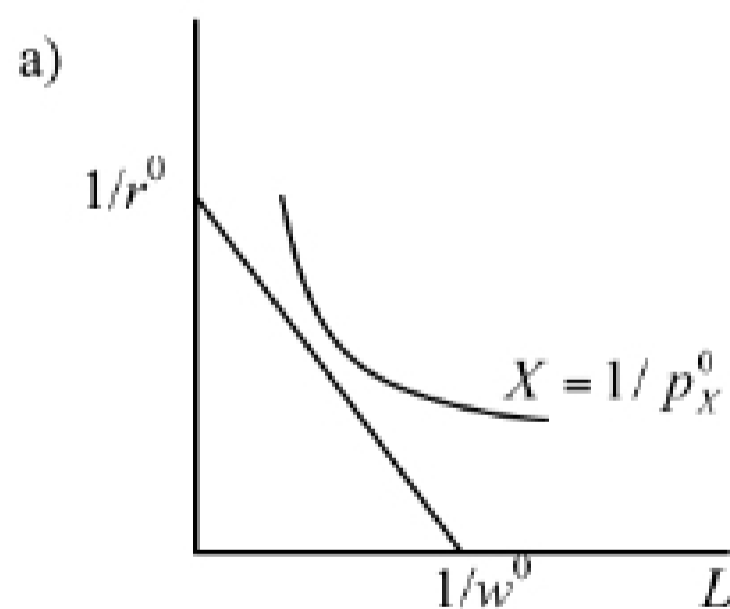


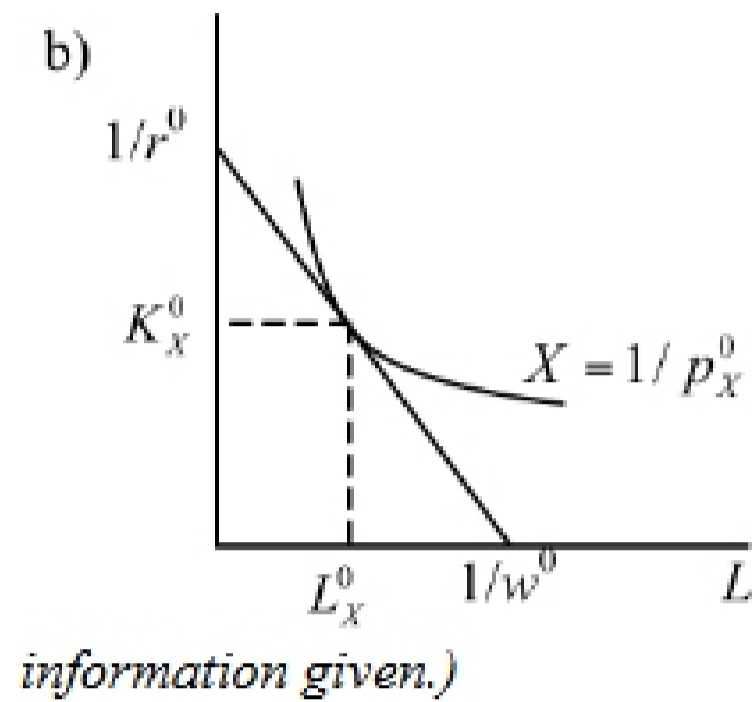
### Problem Set 3 - *Answers*

#### Heckscher-Ohlin and Two-Cone Model

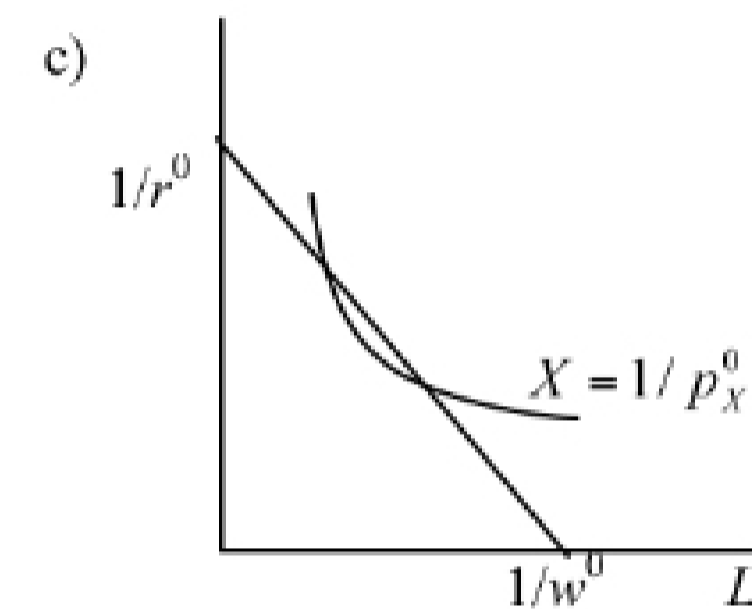
1. Which of the following characterize the Heckscher-Ohlin Model?
  - a. Perfect mobility of factors across industries *Yes*
  - b. Perfect mobility of factors across countries *No*
  - c. Constant returns to scale *Yes*
  - d. The law of diminishing returns *Yes*
  - e. Identical technologies across industries *No*
  - f. Identical technologies across countries *Yes*
  - g. Monopolistic competition *No*
  - h. Perfect competition *Yes*
  - i. Full employment *Yes*
  - j. Balanced trade *Yes*
  - k. Factor intensity reversals *No (These are assumed not to occur.)*
  - l. Identical homothetic preferences *Yes (This is not a necessary assumption for all results of the model, but it is an assumption that we will routinely use.)*
  
2. Suppose that the price of a good,  $X$ , is  $p_X^0$  and that potential producers of that good in a country face factor prices  $w^0$  and  $r^0$ . The three figures below show three ways that these prices might appear in an isoquant-isocost diagram. What can you say, in each case, about what will happen in the  $X$  industry in this country? That is, will the good be produced, can these prices constitute an equilibrium, and if so, what technique of production will be used to produce  $X$ ?



*This says that a dollar's worth of  $X$  requires more factors than can be bought with one dollar. Therefore good  $X$  will not be produced at these prices.*

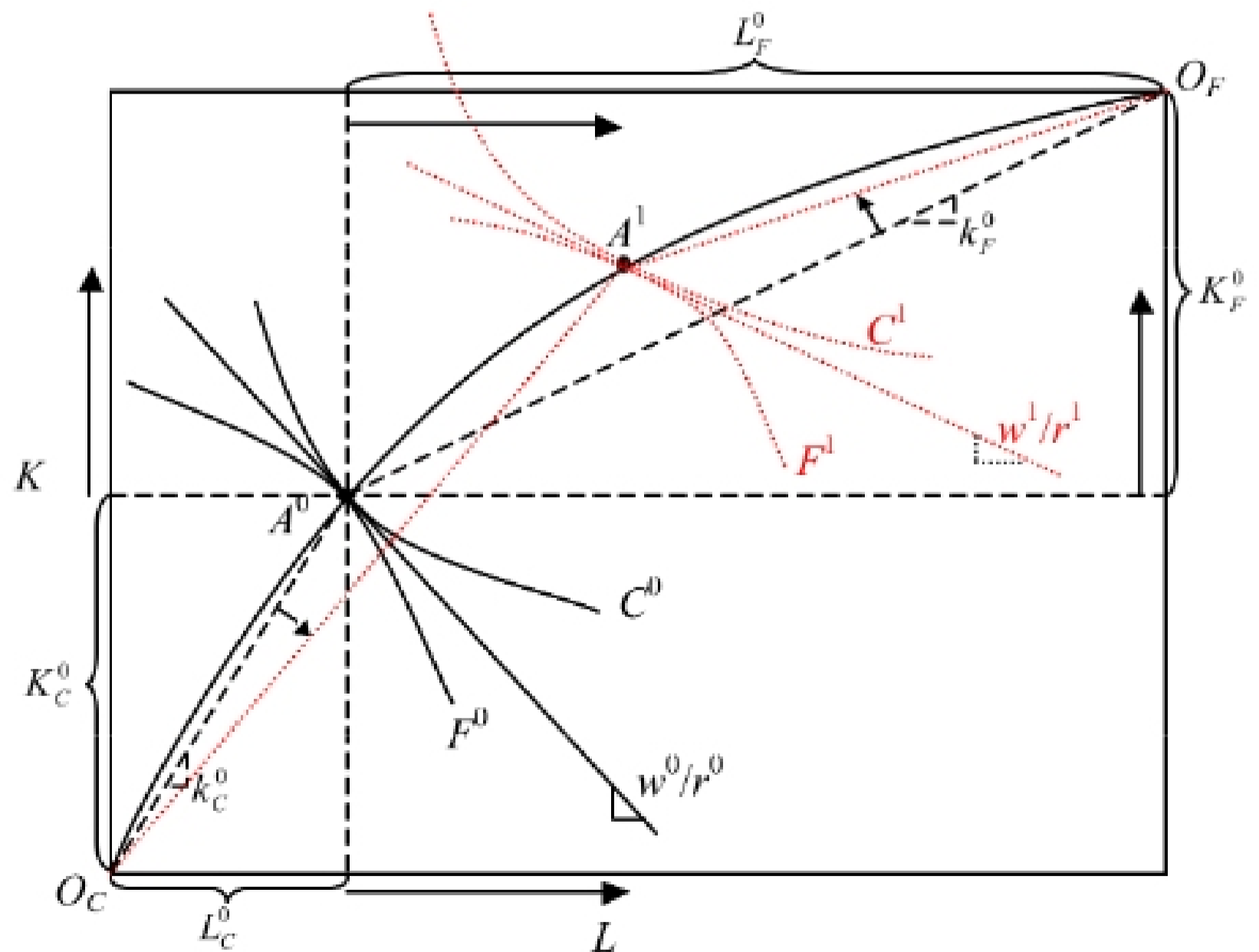


Here producers of  $X$  exactly break even, spending one dollar on factors that will produce one dollar's worth of  $X$ , if they use the least-cost technique of producing it. That least-cost technique is the tangency between the unit isocost line and the unit-value isoquant, and it therefore uses  $L_X^0$  and  $K_X^0$  to produce one dollar's worth of  $X$ . (Unless  $p_X^0 = 1$ , this is not one unit of  $X$  itself, so these are not the unit factor requirements  $a_{LX}$  and  $a_{KX}$ . We cannot determine these from the



Here, all of the points on the isoquant inside the isocost line are ways to produce a dollar's worth of  $X$  at a cost of less than one dollar, thus making a profit. This situation will attract entry into the industry, seeking this profit, and will continue to do so until either the factor prices change (at least one of them rising due to the increased demand for factors) or the price of  $X$  falls (due to the increased supply of  $X$ ). This cannot be an equilibrium situation.

3. The Edgeworth Box below shows the contract curve of a country as well as a particular allocation,  $A^0$ , along that contract curve at which the country would produce, given certain prices,  $p_C^0$  and  $p_F^0$ . Its outputs at  $A^0$  are



$C^0$  and  $F^0$ .

- What is the wage-rental ratio,  $w^0/r^0$ , in this initial equilibrium? Are you able to determine the factor prices,  $w^0$  and  $r^0$ , individually? *The ratio is shown by the slope of the straight line tangent to both isoquants at  $A^0$ . We cannot determine  $w^0$  and  $r^0$ , individually.*
- Identify in the figure the allocations of labor and capital to each of the industries,  $K_C^0$ ,  $L_C^0$ ,  $K_F^0$ , and  $L_F^0$ , as well as their ratios,  $k_C^0 = K_C^0/L_C^0$  and  $k_F^0 = K_F^0/L_F^0$ . *See figure above.*
- Now consider the different allocation, also along the contract curve, shown as  $A^1$ . In order for the country to produce there, how would prices have to differ from  $p_C^0$  and  $p_F^0$ ? *The relative price of cloth must rise in order for the economy to move from  $A^0$  to  $A^1$ . That is,  $p_C^1/p_F^1 > p_C^0/p_F^0$ .*
- How do the factor allocations you looked at in part (b), and their ratios, differ at  $A^1$  from what they were at  $A^0$ ? *These are shown by the arrows in the figure above, from which we see that  $K_C^1 > K_C^0$ ,  $L_C^1 > L_C^0$ ,  $K_F^1 < K_F^0$ ,  $L_F^1 < L_F^0$ ,  $k_C^1 < k_C^0$ ,  $k_F^1 < k_F^0$ .*
- Using the full employment conditions for the two factors, show that the capital-labor ratio of the country as a whole,  $k=K/L$ , is a weighted average of the ratios in the two sectors,  $k_C$  and  $k_F$ .

*The full employment conditions are  $L_C + L_F = L$ ,  $K_C + K_F = K$ .*

*From the first,  $L_F = L - L_C$ . Therefore*

$$k = \frac{K}{L} = \frac{K_C + K_F}{L} = \frac{K_C}{L} + \frac{K_F}{L} = \frac{K_C}{L_C} \frac{L_C}{L} + \frac{K_F}{L_F} \frac{L_F}{L} = k_C \frac{L_C}{L} + k_F \frac{1 - L_C}{L}$$

*which is a weighted average.*

- In part (d), you should have found that both ratios,  $k_C$  and  $k_F$ , fell in going from  $A^0$  to  $A^1$ . Does this mean, in view of the result in part (e), that  $k$  has fallen also? Why or why not? *The ratio  $k$  has not fallen, since it is just the ratio of the factor endowments, which are given. The reason that  $k_C$  and  $k_F$  were both able to fall without lowering  $k$  is that the weights, in the weighted average of part (e), have changed. By reallocating resources into the cloth sector,  $L_C/L$  rises, putting more weight on the larger of the two capital-labor ratios. This makes up for the fall in both of them.*
- Draw isoquants for both industries through point  $A^1$ . Now identify the wage-rental ratio,  $w^1/r^1$ , as you did in part (a). How does it compare to  $w^0/r^0$ ? *The wage-rental ratio must be smaller at  $A^1$  than at  $A^0$ :  $w^1/r^1 < w^0/r^0$ . That is, the isoquants are flatter there than at  $A^0$ . The reason is that the capital-labor ratios have both fallen, so that the industries move along their isoquants toward less capital and more labor, and when that happens they get flatter, due to their curvature. I'd be willing to bet that most of you, at least when you first drew the new isoquants, drew them steeper.*